

# PISANO ZBRAJANJE ČETVEROZNAMENKASTIH BROJEVA



1

Zadaci koje možemo iskoristiti na dopunskoj nastavi ili za rad s učenicima koji nastavu pohađaju po prilagođenom programu.

Najtoplije zahvaljujem kolegici **Miri Čuvidić** na dopuštenju da zadatke objavim na svojim web stranicama.

Antonija Horvatek

*Matematika na dlanu*

<http://www.antonija-horvatek.from.hr/>

# PISANO ZBRAJANJE ČETVEROZNAMENKASTIH BROJEVA



2

1. Pisano zbroji:

$$\begin{array}{r} 2156 \\ +2222 \\ \hline \end{array}$$
$$\begin{array}{r} 2543 \\ +5123 \\ \hline \end{array}$$
$$\begin{array}{r} 1444 \\ +5231 \\ \hline \end{array}$$
$$\begin{array}{r} 1121 \\ +2221 \\ \hline \end{array}$$
$$\begin{array}{r} 5328 \\ +2121 \\ \hline \end{array}$$
$$\begin{array}{r} 2333 \\ +1253 \\ \hline \end{array}$$


$$\begin{array}{r} 2156 \\ +2622 \\ \hline \end{array}$$
$$\begin{array}{r} 8522 \\ +3444 \\ \hline \end{array}$$
$$\begin{array}{r} 3251 \\ +5234 \\ \hline \end{array}$$
$$\begin{array}{r} 6152 \\ +2221 \\ \hline \end{array}$$
$$\begin{array}{r} 5222 \\ +1281 \\ \hline \end{array}$$
$$\begin{array}{r} 2295 \\ +1201 \\ \hline \end{array}$$

$$\begin{array}{r} 4187 \\ +5512 \\ \hline \end{array}$$
$$\begin{array}{r} 5471 \\ +5421 \\ \hline \end{array}$$
$$\begin{array}{r} 5551 \\ +2141 \\ \hline \end{array}$$
$$\begin{array}{r} 5471 \\ +2125 \\ \hline \end{array}$$
$$\begin{array}{r} 5541 \\ +5412 \\ \hline \end{array}$$
$$\begin{array}{r} 4511 \\ +4114 \\ \hline \end{array}$$


$$\begin{array}{r} 6621 \\ +2314 \\ \hline \end{array}$$
$$\begin{array}{r} 5511 \\ +2427 \\ \hline \end{array}$$
$$\begin{array}{r} 4531 \\ +1234 \\ \hline \end{array}$$
$$\begin{array}{r} 7252 \\ +4121 \\ \hline \end{array}$$
$$\begin{array}{r} 7161 \\ +8924 \\ \hline \end{array}$$
$$\begin{array}{r} 7453 \\ +1111 \\ \hline \end{array}$$

$$\begin{array}{r} 4532 \\ +5153 \\ \hline \end{array}$$
$$\begin{array}{r} 5473 \\ +3422 \\ \hline \end{array}$$
$$\begin{array}{r} 5554 \\ +2135 \\ \hline \end{array}$$
$$\begin{array}{r} 5428 \\ +2131 \\ \hline \end{array}$$
$$\begin{array}{r} 5548 \\ +5411 \\ \hline \end{array}$$
$$\begin{array}{r} 4583 \\ +4114 \\ \hline \end{array}$$

2. U jednom vlaku nalazi se 267 ljudi. U vlak je u Zagrebu ušlo još 150 ljudi, a nitko nije izašao. Koliko je sada ljudi u tom vlaku?



3. Marko je ubrao 146 kg jabuka, a Krešo 122 kg. Koliko su kg jabuka ubrali zajedno ?




# PISANO ZBRAJANJE ČETVEROZNAMENKASTIH BROJEVA



3

1. Mirko ima 800 kuna, a Marija 1 234 kune. Koliko kuna oni imaju zajedno?



2. Koji broj je za 1000 veći od 3 456 ?

3. Pisano zbroji :

6 621	5 511	4 531	7 252	7 161	7 453
<u>+2 314</u>	<u>+ 2 427</u>	<u>+1 234</u>	<u>+4 121</u>	<u>+ 8 924</u>	<u>+ 1 111</u>

4 532	5 473	5 554	5 428	5 548	4 583
<u>+5 153</u>	<u>+3 422</u>	<u>+2 135</u>	<u>+2 131</u>	<u>+5 411</u>	<u>+4 114</u>

6 125	5 513	4 334	7 254	3 554	3 453
<u>+3 614</u>	<u>+ 3 424</u>	<u>+ 1 224</u>	<u>+2 132</u>	<u>+ 2 342</u>	<u>+4 111</u>

4156	1 543	1 445	1 127	4 358	2 335
<u>+2222</u>	<u>+5 123</u>	<u>+5 231</u>	<u>+2 221</u>	<u>+2 121</u>	<u>+ 3 253</u>

3 156	4 522	2 251	5 152	5 225	2 293
<u>+3 622</u>	<u>+3 444</u>	<u>+5 234</u>	<u>+2 221</u>	<u>+1 281</u>	<u>+1 201</u>

# PISANO ZBRAJANJE ČETVEROZNAMENKASTIH BROJEVA



4

1. Pisano zbroji sljedeće brojeve:

$$\begin{array}{r} 1\ 185 \\ +6\ 512 \\ \hline \end{array} \quad \begin{array}{r} 5\ 471 \\ +3\ 424 \\ \hline \end{array} \quad \begin{array}{r} 5\ 551 \\ +2\ 145 \\ \hline \end{array} \quad \begin{array}{r} 5\ 453 \\ +2\ 125 \\ \hline \end{array} \quad \begin{array}{r} 5\ 541 \\ +5\ 452 \\ \hline \end{array} \quad \begin{array}{r} 4\ 541 \\ +4\ 114 \\ \hline \end{array}$$

$$\begin{array}{r} 6\ 624 \\ +2\ 314 \\ \hline \end{array} \quad \begin{array}{r} 5\ 513 \\ +2\ 422 \\ \hline \end{array} \quad \begin{array}{r} 4\ 535 \\ +1\ 234 \\ \hline \end{array} \quad \begin{array}{r} 7\ 255 \\ +2\ 521 \\ \hline \end{array} \quad \begin{array}{r} 7\ 165 \\ +8\ 924 \\ \hline \end{array} \quad \begin{array}{r} 7\ 453 \\ +2\ 117 \\ \hline \end{array}$$

$$\begin{array}{r} 4\ 544 \\ +5\ 153 \\ \hline \end{array} \quad \begin{array}{r} 5\ 473 \\ +3\ 434 \\ \hline \end{array} \quad \begin{array}{r} 5\ 554 \\ +2\ 133 \\ \hline \end{array} \quad \begin{array}{r} 5\ 425 \\ +2\ 122 \\ \hline \end{array} \quad \begin{array}{r} 2\ 548 \\ +5\ 420 \\ \hline \end{array} \quad \begin{array}{r} 2\ 583 \\ +4\ 105 \\ \hline \end{array}$$

$$\begin{array}{r} 6\ 125 \\ +2\ 620 \\ \hline \end{array} \quad \begin{array}{r} 4\ 513 \\ +5\ 424 \\ \hline \end{array} \quad \begin{array}{r} 4\ 320 \\ +4\ 224 \\ \hline \end{array} \quad \begin{array}{r} 3\ 233 \\ +2\ 132 \\ \hline \end{array} \quad \begin{array}{r} 4\ 522 \\ +2\ 342 \\ \hline \end{array} \quad \begin{array}{r} 5\ 453 \\ +4\ 122 \\ \hline \end{array}$$

$$\begin{array}{r} 6\ 621 \\ +2\ 315 \\ \hline \end{array} \quad \begin{array}{r} 5\ 524 \\ +2\ 435 \\ \hline \end{array} \quad \begin{array}{r} 4\ 531 \\ +5\ 234 \\ \hline \end{array} \quad \begin{array}{r} 7\ 200 \\ +4\ 185 \\ \hline \end{array} \quad \begin{array}{r} 7\ 512 \\ +8\ 373 \\ \hline \end{array} \quad \begin{array}{r} 5\ 432 \\ +1\ 312 \\ \hline \end{array}$$

2. Od škole do pošte ima 1 234 m, a od pošte do trgovine 2 342 m. Koliko metara ima od škole do trgovine?



3. Koji broj je za 10 veći od zadanih brojeva?

2 330 \_\_\_\_\_ 3 450 \_\_\_\_\_ 3 555 \_\_\_\_\_

# PISANO ZBRAJANJE ČETVEROZNAMENKASTIH BROJEVA



5

1. Pisano zbroji brojeve:

$$\begin{array}{r} 3\ 156 \\ +2\ 625 \\ \hline \end{array}$$
$$\begin{array}{r} 3\ 522 \\ +5\ 448 \\ \hline \end{array}$$
$$\begin{array}{r} 4\ 251 \\ +5\ 239 \\ \hline \end{array}$$
$$\begin{array}{r} 7\ 152 \\ +2\ 228 \\ \hline \end{array}$$
$$\begin{array}{r} 4\ 229 \\ +1\ 281 \\ \hline \end{array}$$
$$\begin{array}{r} 3\ 295 \\ +1\ 205 \\ \hline \end{array}$$

$$\begin{array}{r} 3\ 857 \\ +4\ 455 \\ \hline \end{array}$$
$$\begin{array}{r} 4\ 854 \\ +1\ 621 \\ \hline \end{array}$$
$$\begin{array}{r} 5\ 483 \\ +4\ 511 \\ \hline \end{array}$$
$$\begin{array}{r} 3\ 525 \\ +4\ 112 \\ \hline \end{array}$$
$$\begin{array}{r} 2\ 214 \\ +3\ 332 \\ \hline \end{array}$$
$$\begin{array}{r} 5\ 542 \\ +1\ 253 \\ \hline \end{array}$$


$$\begin{array}{r} 4\ 187 \\ +5\ 513 \\ \hline \end{array}$$
$$\begin{array}{r} 5\ 479 \\ +5\ 421 \\ \hline \end{array}$$
$$\begin{array}{r} 5\ 559 \\ +2\ 151 \\ \hline \end{array}$$
$$\begin{array}{r} 5\ 476 \\ +2\ 145 \\ \hline \end{array}$$
$$\begin{array}{r} 5\ 549 \\ +5\ 412 \\ \hline \end{array}$$
$$\begin{array}{r} 4\ 517 \\ +4\ 114 \\ \hline \end{array}$$

$$\begin{array}{r} 6\ 626 \\ +2\ 314 \\ \hline \end{array}$$
$$\begin{array}{r} 5\ 515 \\ +2\ 427 \\ \hline \end{array}$$
$$\begin{array}{r} 4\ 536 \\ +1\ 234 \\ \hline \end{array}$$
$$\begin{array}{r} 7\ 252 \\ +4\ 189 \\ \hline \end{array}$$
$$\begin{array}{r} 7\ 161 \\ +8\ 929 \\ \hline \end{array}$$
$$\begin{array}{r} 7\ 453 \\ +1\ 118 \\ \hline \end{array}$$

2. U Bjelovarsko - bilogorskoj županiji ima 4 320 traktora, a u Brodsko – posavskoj županiji 3 227 traktora. Koliko ukupno traktora ima u te dvije županije?



3. Tijekom mjeseca rujna na jednoj tržnici prodano je 2 345 kg jabuka i 4 556 kg šljiva. Koliko je ukupno kg jabuka i šljiva prodano na toj tržnici u rujnu?



# PISANO ZBRAJANJE ČETVEROZNAMENKASTIH BROJEVA



6

1. Pisano zbroji:

$$\begin{array}{r} 4\ 532 \\ +5\ 158 \\ \hline \end{array}$$
$$\begin{array}{r} 5\ 478 \\ +5\ 477 \\ \hline \end{array}$$
$$\begin{array}{r} 5\ 558 \\ +2\ 155 \\ \hline \end{array}$$
$$\begin{array}{r} 5\ 478 \\ +2\ 145 \\ \hline \end{array}$$
$$\begin{array}{r} 5\ 548 \\ +5\ 419 \\ \hline \end{array}$$
$$\begin{array}{r} 4\ 589 \\ +4\ 114 \\ \hline \end{array}$$

$$\begin{array}{r} 6\ 125 \\ +4\ 617 \\ \hline \end{array}$$
$$\begin{array}{r} 5\ 513 \\ +3\ 428 \\ \hline \end{array}$$
$$\begin{array}{r} 4\ 334 \\ +1\ 229 \\ \hline \end{array}$$
$$\begin{array}{r} 7\ 254 \\ +2\ 138 \\ \hline \end{array}$$
$$\begin{array}{r} 3\ 554 \\ +2\ 349 \\ \hline \end{array}$$
$$\begin{array}{r} 3\ 453 \\ +4\ 117 \\ \hline \end{array}$$

$$\begin{array}{r} 6\ 626 \\ +1\ 316 \\ \hline \end{array}$$
$$\begin{array}{r} 5\ 585 \\ +2\ 457 \\ \hline \end{array}$$
$$\begin{array}{r} 4\ 539 \\ +1\ 234 \\ \hline \end{array}$$
$$\begin{array}{r} 7\ 859 \\ +4\ 182 \\ \hline \end{array}$$
$$\begin{array}{r} 6\ 568 \\ +8\ 423 \\ \hline \end{array}$$
$$\begin{array}{r} 5\ 453 \\ +1\ 119 \\ \hline \end{array}$$

$$\begin{array}{r} 6\ 621 \\ +2\ 014 \\ \hline \end{array}$$
$$\begin{array}{r} 5\ 539 \\ +1\ 417 \\ \hline \end{array}$$
$$\begin{array}{r} 3\ 537 \\ +5\ 234 \\ \hline \end{array}$$
$$\begin{array}{r} 7\ 259 \\ +2\ 129 \\ \hline \end{array}$$
$$\begin{array}{r} 7\ 568 \\ +1\ 927 \\ \hline \end{array}$$
$$\begin{array}{r} 5\ 458 \\ +6\ 716 \\ \hline \end{array}$$

2. Jedan trkač pretrčao je 2 678 m, a drugi trkač 1 345 m više. Koliko metara su pretrčali ukupno ta dva trkača?



3. Koji broj je za 2 345 veći od 4 562?

4. U jednoj košari je 1 456 oraha, a u drugoj 45 oraha više. Koliko oraha ima u objema košarama?



# PISANO ZBRAJANJE ČETVEROZNAMENKASTIH BROJEVA



7

1. Pisano zbroji:

$$\begin{array}{r} 3\ 156 \\ +9\ 625 \\ \hline \end{array}$$
$$\begin{array}{r} 3\ 522 \\ +8\ 448 \\ \hline \end{array}$$
$$\begin{array}{r} 7\ 251 \\ +5\ 239 \\ \hline \end{array}$$
$$\begin{array}{r} 7\ 152 \\ +8\ 228 \\ \hline \end{array}$$
$$\begin{array}{r} 4\ 289 \\ +1\ 281 \\ \hline \end{array}$$
$$\begin{array}{r} 3\ 295 \\ +9\ 205 \\ \hline \end{array}$$

$$\begin{array}{r} 3\ 857 \\ +4\ 485 \\ \hline \end{array}$$
$$\begin{array}{r} 4\ 854 \\ +1\ 671 \\ \hline \end{array}$$
$$\begin{array}{r} 5\ 483 \\ +4\ 561 \\ \hline \end{array}$$
$$\begin{array}{r} 3\ 525 \\ +4\ 152 \\ \hline \end{array}$$
$$\begin{array}{r} 2\ 214 \\ +3\ 392 \\ \hline \end{array}$$
$$\begin{array}{r} 5\ 542 \\ +1\ 293 \\ \hline \end{array}$$

$$\begin{array}{r} 4\ 187 \\ +5\ 583 \\ \hline \end{array}$$
$$\begin{array}{r} 5\ 479 \\ +5\ 471 \\ \hline \end{array}$$
$$\begin{array}{r} 5\ 559 \\ +2\ 161 \\ \hline \end{array}$$
$$\begin{array}{r} 5\ 476 \\ +7\ 145 \\ \hline \end{array}$$
$$\begin{array}{r} 5\ 549 \\ +9\ 492 \\ \hline \end{array}$$
$$\begin{array}{r} 4\ 517 \\ +4\ 194 \\ \hline \end{array}$$

$$\begin{array}{r} 6\ 626 \\ +2\ 374 \\ \hline \end{array}$$
$$\begin{array}{r} 5\ 515 \\ +2\ 497 \\ \hline \end{array}$$
$$\begin{array}{r} 4\ 536 \\ +1\ 284 \\ \hline \end{array}$$
$$\begin{array}{r} 7\ 251 \\ +2\ 189 \\ \hline \end{array}$$
$$\begin{array}{r} 7\ 161 \\ +2\ 929 \\ \hline \end{array}$$
$$\begin{array}{r} 7\ 459 \\ +1\ 168 \\ \hline \end{array}$$

$$\begin{array}{r} 4\ 537 \\ +5\ 168 \\ \hline \end{array}$$
$$\begin{array}{r} 5\ 478 \\ +7\ 497 \\ \hline \end{array}$$
$$\begin{array}{r} 5\ 558 \\ +6\ 155 \\ \hline \end{array}$$
$$\begin{array}{r} 5\ 478 \\ +2\ 175 \\ \hline \end{array}$$
$$\begin{array}{r} 5\ 548 \\ +5\ 499 \\ \hline \end{array}$$
$$\begin{array}{r} 4\ 589 \\ +9\ 184 \\ \hline \end{array}$$

2. U jednom jatu ima 3 456 ptica, a u drugom 4 367 ptica. Koliko ukupno ptica ima u oba jata?



3. Na crte upiši broj za jedan veći od zadanoga broja:

$$2\ 345 \quad \underline{\hspace{2cm}} \quad 1\ 234 \quad \underline{\hspace{2cm}} \quad 6\ 777 \quad \underline{\hspace{2cm}}$$

$$1\ 200 \quad \underline{\hspace{2cm}} \quad 1\ 390 \quad \underline{\hspace{2cm}} \quad 5\ 999 \quad \underline{\hspace{2cm}}$$

# PISANO ZBRAJANJE ČETVEROZNAMENKASTIH BROJEVA

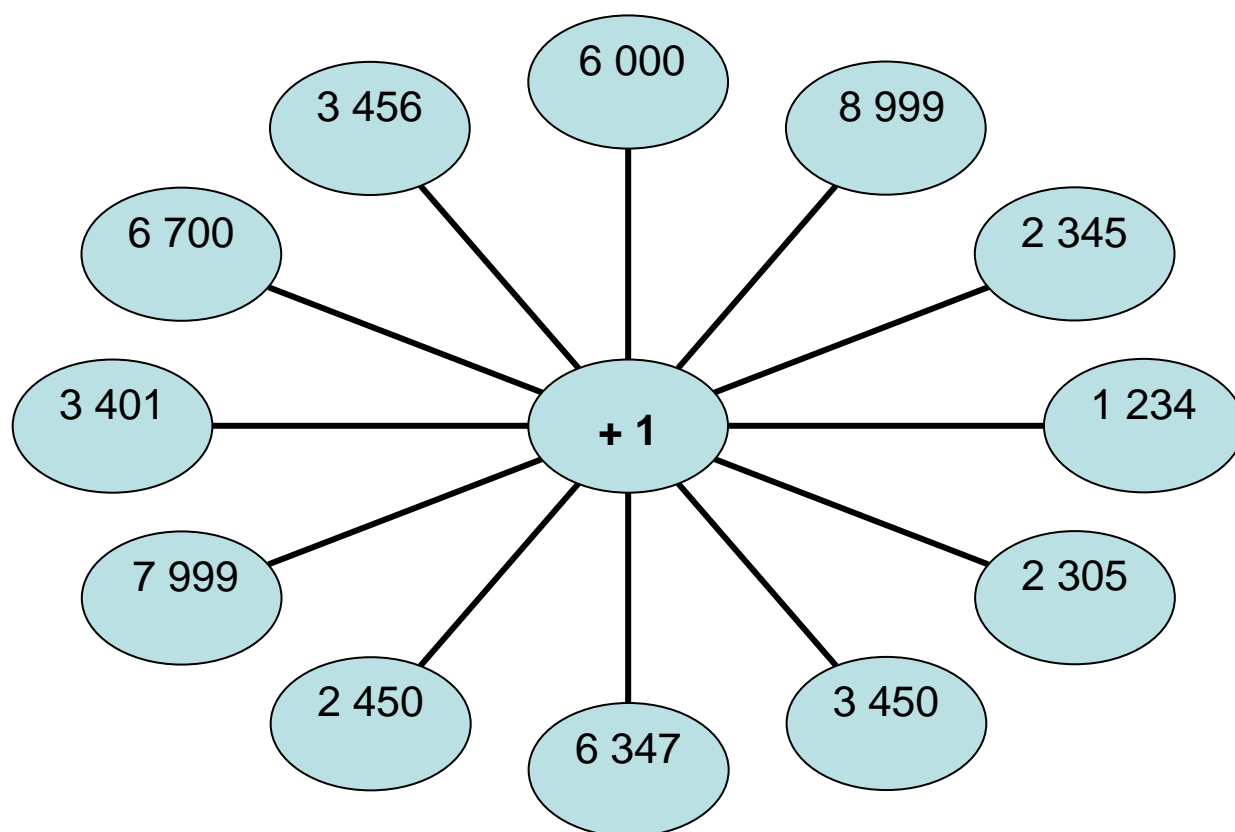


$$\begin{array}{r} 4\ 537 \\ +5\ 168 \\ \hline \end{array}$$
$$\begin{array}{r} 5\ 478 \\ +7\ 407 \\ \hline \end{array}$$
$$\begin{array}{r} 5\ 558 \\ +6\ 105 \\ \hline \end{array}$$
$$\begin{array}{r} 5\ 478 \\ +2\ 145 \\ \hline \end{array}$$
$$\begin{array}{r} 5\ 548 \\ +5\ 499 \\ \hline \end{array}$$
$$\begin{array}{r} 4\ 589 \\ +9\ 184 \\ \hline \end{array}$$

$$\begin{array}{r} 7\ 125 \\ +3\ 687 \\ \hline \end{array}$$
$$\begin{array}{r} 5\ 513 \\ +3\ 498 \\ \hline \end{array}$$
$$\begin{array}{r} 4\ 334 \\ +1\ 289 \\ \hline \end{array}$$
$$\begin{array}{r} 7\ 254 \\ +2\ 158 \\ \hline \end{array}$$
$$\begin{array}{r} 3\ 554 \\ +9\ 389 \\ \hline \end{array}$$
$$\begin{array}{r} 3\ 453 \\ +6\ 197 \\ \hline \end{array}$$

$$\begin{array}{r} 6\ 626 \\ +6\ 399 \\ \hline \end{array}$$
$$\begin{array}{r} 4\ 585 \\ +2\ 478 \\ \hline \end{array}$$
$$\begin{array}{r} 5\ 539 \\ +8\ 284 \\ \hline \end{array}$$
$$\begin{array}{r} 8\ 259 \\ +4\ 177 \\ \hline \end{array}$$
$$\begin{array}{r} 7\ 568 \\ +8\ 463 \\ \hline \end{array}$$
$$\begin{array}{r} 5\ 453 \\ +2\ 919 \\ \hline \end{array}$$

$$\begin{array}{r} 6\ 721 \\ +2\ 314 \\ \hline \end{array}$$
$$\begin{array}{r} 5\ 539 \\ +2\ 717 \\ \hline \end{array}$$
$$\begin{array}{r} 4\ 537 \\ +5\ 284 \\ \hline \end{array}$$
$$\begin{array}{r} 7\ 259 \\ +8\ 129 \\ \hline \end{array}$$
$$\begin{array}{r} 7\ 568 \\ +1\ 927 \\ \hline \end{array}$$
$$\begin{array}{r} 5\ 458 \\ +6\ 796 \\ \hline \end{array}$$



Ispod svakoga broja napiši broj koji je za 1 veći od zadanoga broja.



# PISANO ZBRAJANJE ČETVEROZNAMENKASTIH BROJEVA



1. Pisano zbroji:

$$\begin{array}{r} 3\ 156 \\ +4\ 625 \\ \hline \end{array} \quad \begin{array}{r} 3\ 533 \\ +8\ 448 \\ \hline \end{array} \quad \begin{array}{r} 7\ 233 \\ +5\ 239 \\ \hline \end{array} \quad \begin{array}{r} 7\ 155 \\ +8\ 228 \\ \hline \end{array} \quad \begin{array}{r} 4\ 233 \\ +1\ 281 \\ \hline \end{array} \quad \begin{array}{r} 3\ 266 \\ +9\ 205 \\ \hline \end{array}$$

$$\begin{array}{r} 7\ 857 \\ +4\ 485 \\ \hline \end{array} \quad \begin{array}{r} 4\ 854 \\ +7\ 671 \\ \hline \end{array} \quad \begin{array}{r} 5\ 445 \\ +4\ 561 \\ \hline \end{array} \quad \begin{array}{r} 3\ 566 \\ +4\ 152 \\ \hline \end{array} \quad \begin{array}{r} 2\ 233 \\ +3\ 392 \\ \hline \end{array} \quad \begin{array}{r} 5\ 555 \\ +1\ 293 \\ \hline \end{array}$$

$$\begin{array}{r} 4\ 144 \\ +5\ 563 \\ \hline \end{array} \quad \begin{array}{r} 5\ 455 \\ +5\ 371 \\ \hline \end{array} \quad \begin{array}{r} 5\ 577 \\ +4\ 161 \\ \hline \end{array} \quad \begin{array}{r} 5\ 488 \\ +9\ 145 \\ \hline \end{array} \quad \begin{array}{r} 5\ 577 \\ +6\ 492 \\ \hline \end{array} \quad \begin{array}{r} 4\ 887 \\ +7\ 191 \\ \hline \end{array}$$

$$\begin{array}{r} 6\ 647 \\ +2\ 374 \\ \hline \end{array} \quad \begin{array}{r} 5\ 467 \\ +2\ 497 \\ \hline \end{array} \quad \begin{array}{r} 4\ 567 \\ +1\ 284 \\ \hline \end{array} \quad \begin{array}{r} 7\ 266 \\ +2\ 189 \\ \hline \end{array} \quad \begin{array}{r} 7\ 169 \\ +2\ 929 \\ \hline \end{array} \quad \begin{array}{r} 7\ 466 \\ +1\ 168 \\ \hline \end{array}$$

$$\begin{array}{r} 8\ 667 \\ +5\ 168 \\ \hline \end{array} \quad \begin{array}{r} 7\ 478 \\ +7\ 407 \\ \hline \end{array} \quad \begin{array}{r} 8\ 566 \\ +6\ 155 \\ \hline \end{array} \quad \begin{array}{r} 5\ 499 \\ +2\ 175 \\ \hline \end{array} \quad \begin{array}{r} 5\ 545 \\ +5\ 499 \\ \hline \end{array} \quad \begin{array}{r} 4\ 577 \\ +9\ 184 \\ \hline \end{array}$$

2. Izračunaj:

PRIBROJNIK	2 345	1 230	2 345	6 545	2 333	1 233	6 789
PRIBROJNIK	2 224	1 234	6 789	1 345	5 677	1 277	3 430
ZBROJ							

PRIBROJNIK	7 344	7 230	2 340	6 533	7 311	4 233	6 744
PRIBROJNIK	2 233	1 239	8 709	3 345	3 277	1 281	2 430
ZBROJ							